



Printables for “Full Speed Ahead”

KNPIG ID # A 3333.1 – RED

This file contains printables for up to five students.

For each additional group of students printone new file.

- 6 Quantity Line Game Boards
- 24 Treasure Map Word Problem Cards
- 8 Blank Treasure Map Cards

The teacher note for this activity can be found on the activity lesson plan.

Created by Jordan Rhude & Emily Westerling, 2015



High Water Cove



Use the quantity line to find the answer!




Cactus Dunes



Use the quantity line to find the answer!



Fair Weather Valley



Use the
quantity line
to find the
answer!





Spooky Cave



Use the quantity line to find the answer!



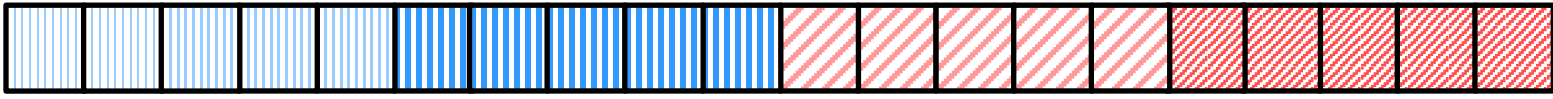
Ship Wreck Island



Use the
quantity
line to find
the answer!



The Open Seas



Use the quantity line to find the answer!



Pirate Bob has fourteen gold coins. While walking on the beach he found five gold coins. How many gold coins does Pirate Bob have now?

Add to Result Unknown

Captain Jack has nine bandanas. While at the market, he picked up three more. How many bandanas does Captain Jack have now?

Add to Result Unknown

Polly the Parrot has seven crackers. Captain Jack gave Polly five more crackers. How many crackers does Polly the Parrot have now?

Add to Result Unknown

Black Beard has four treasure maps. He found thirteen more. How many treasure maps does Black Beard have now?

Add to Result Unknown

A crewmate found twelve coconuts in the galley. She then found six more coconuts in the crow's-nest. How many coconuts does she have now?

Addition- Add to Result Unknown

Ahoy! Four monkeys sit in a palm tree. Twelve monkeys sit on the sand. How many monkeys are there altogether?

Addition- Add to Result Unknown

The crew of the Black Pearl has lots of peg legs! Two pirates have left peg legs. Eight pirates have right peg legs. How many peg legs are there altogether?

Add to Result Unknown

Pirate Pete travels three steps north to get to the treasure. He then takes five steps west. How many steps does Pirate Pete take altogether?

Add to Result Unknown

A monkey had a bunch of ten bananas. He ate seven and then took a nap. How many bananas were left?

Take from Result Unknown

Seventeen jellyfish were hanging out in the reef. Eight jellyfish then swan away. How many jellyfish were still in the reef?

Take from Result Unknown

Peg-leg Louise had a collection of thirteen seashells. She gave six to her friend the sea otter. How many shells does Louise have left?

Take from Result Unknown

Shark lagoon has fourteen sharks swimming in its waters. Nine sharks swam out to the open sea. How many sharks are in the lagoon now?

Take from Result Unknown

Pirate Bob is counting his nineteen gold coins. A seagull swooped down and knocked six into the ocean. How many gold coins does Bob have left?

Take from Result Unknown

Jolly Rodger Bay has sixteen ships docked at the harbor. Eleven ships then sailed away. How many ships are left in Jolly Rodger Bay?

Take from Result Unknown

The Flying Dutchman has eight treasure chests. The ghost of Davy Jones stole four treasures chests. How many chests are left?

Take from Result Unknown

Eleven pirates were captured and thrown into jail. Eight of those pirates escaped. How many pirates are still in jail?

Take from Result Unknown

Captain Sasha has fifteen cannonballs. She placed five in the cannons and the rest in a crate. How many cannonballs are in the crate?

Put Together/Take Apart- Addend Unknown

Twenty crabs scurried onto Shipwreck Island. Thirteen were red. The rest were blue. How many were blue?

Put Together/Take Apart- Addend Unknown

There are fourteen pieces of fruit in Captain Cook's bin. Seven were coconuts and the rest are mangos. How many are mangos?

Put Together/Take Apart- Addend Unknown

A school of ten fish swim toward the hull of the Black Pearl. Three are sword fish. The rest are clownfish. How many clownfish are there?

Put Together/Take Apart- Addend Unknown

First-Mate Lily has eighteen pets. Four are parrots and the rest are mice. How many pet mice does First-Mate Lily have?

Put Together/Take Apart- Addend Unknown

One-Eyed Ollie has eleven left shoes. Two are black. The rest of his shoes are brown. How many brown left shoes does Ollie have?

Put Together/Take Apart- Addend Unknown

While at the docks, Shelly the Sea Turtle found twelve rings. Seven of those rings are gold and the rest are silver. How many silver rings did Shelly find?

Put Together/Take Apart- Addend Unknown

Beckett the Bold jumped into the ocean and lost nineteen gems. Five gems were rubies. The rest were emeralds. How many emeralds did Beckett the Bold lose?

Put Together/Take Apart- Addend Unknown

