



Printables for “Full Speed Ahead”

KNPIG ID # A 3333.0 – YELLOW

This file contains printables for up to five students.

For each additional group of students print one new file.

- 6 Quantity Line Game Boards
- 16 Treasure Map Word Problem Cards
- 8 Blank Treasure Map Cards

The teacher note for this activity can be found on the activity lesson plan.

Created by Jordan Rhude & Emily Westerling, 2015



High Water Cove



Use the quantity line to find the answer!




Cactus Dunes



Use the quantity line to find the answer!



Fair Weather Valley




Use the
quantity line
to find the
answer!






Spooky Cave



Use the quantity line to find the answer!



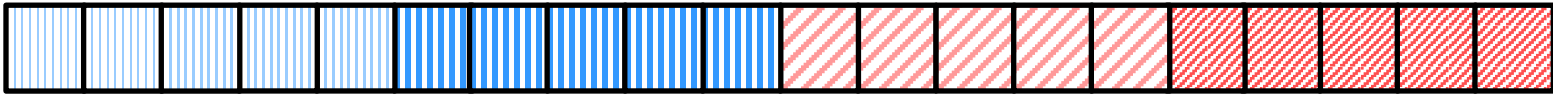
Ship Wreck Island



Use the
quantity
line to find
the answer!



The Open Seas



Use the quantity line to find the answer!



Pirate Bob has four gold coins. While walking on the beach he found five gold coins. How many gold coins does Pirate Bob have now?

Add to Result Unknown

Captain Jack has two bandanas. While at the market, he picked up three more. How many bandanas does Captain Jack have now?

Add to Result Unknown

Polly the Parrot has seven crackers. Captain Jack gave Polly two more crackers. How many crackers does Polly the Parrot have now?

Add to Result Unknown

Black Beard has four treasure maps. He found four more. How many treasure maps does Black Beard have now?

Add to Result Unknown

A crewmate found two coconuts in the galley. She then found six more coconuts in the crow's-nest. How many coconuts does she have now?

Addition- Add to Result Unknown

Ahoy! Four monkeys sit in a palm tree. Six monkeys sit on the sand. How many monkeys are there altogether?

Addition- Add to Result Unknown

The crew of the Black Pearl has lots of peg legs! Two pirates have left peg legs. Eight pirates have right peg legs. How many peg legs are there altogether?

Add to Result Unknown

Pirate Pete travels three steps north to get to the treasure. He then takes four steps west. How many steps does Pirate Pete take altogether?

Add to Result Unknown

A monkey had a bunch of ten bananas. He ate seven and then took a nap. How many bananas were left?

Take from Result Unknown

Seven jellyfish were hanging out in the reef. Three jellyfish then swan away. How many jellyfish were still in the reef?

Take from Result Unknown

Peg-leg Louise had a collection of eight seashells. She gave six to her friend the sea otter. How many shells does Louise have left?

Take from Result Unknown

Shark lagoon has nine sharks swimming in its waters. Eight sharks swam out to the open sea. How many sharks are in the lagoon now?

Take from Result Unknown

Pirate Bob is counting his nine gold coins. A seagull swooped down and knocked six into the ocean. How many gold coins does Bob have left?

Take from Result Unknown

Jolly Rodger Bay has six ships docked at the harbor. Four ships then sailed away. How many ships are left in Jolly Rodger Bay?

Take from Result Unknown

The Flying Dutchman has ten treasure chests. The ghost of Davy Jones stole four treasures chests. How many chests are left?

Take from Result Unknown

Eight pirates were captured and thrown into jail. Five of those pirates escaped. How many pirates are still in jail?

Take from Result Unknown

